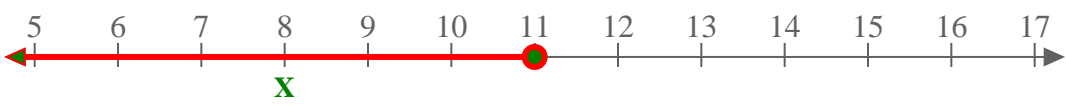

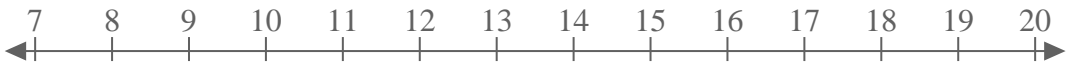
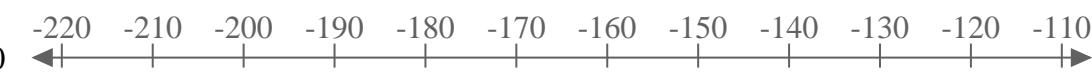
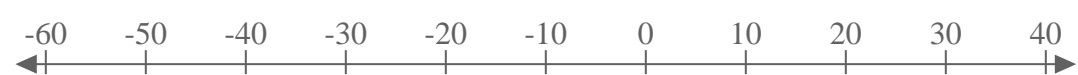
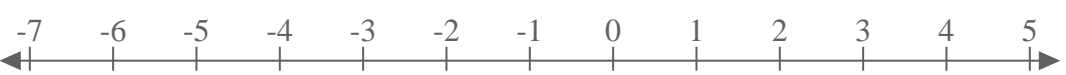
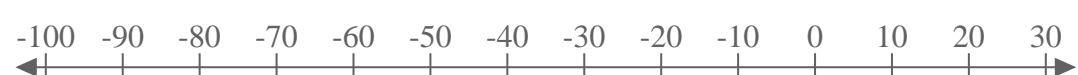
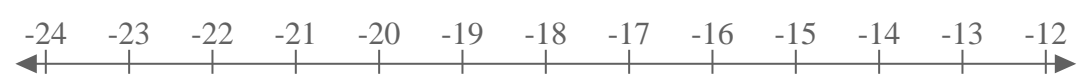
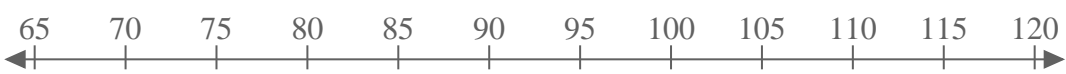
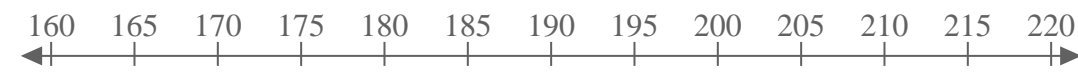
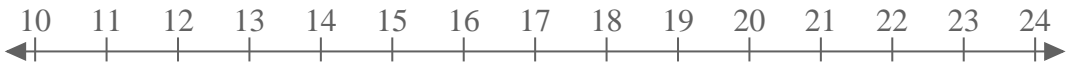
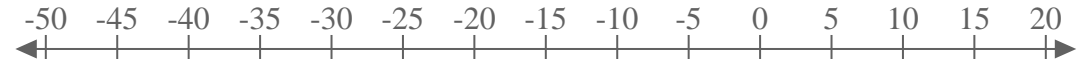
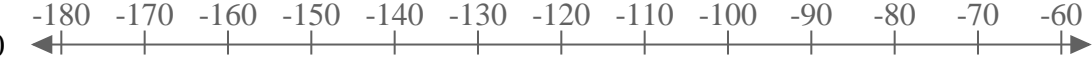
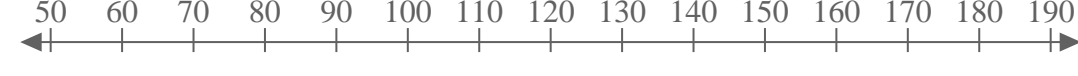


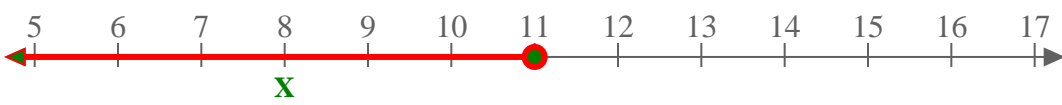
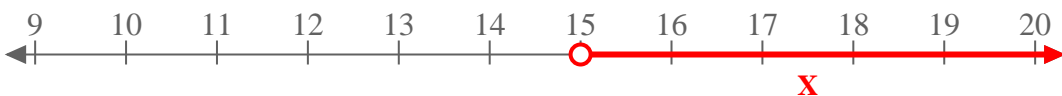
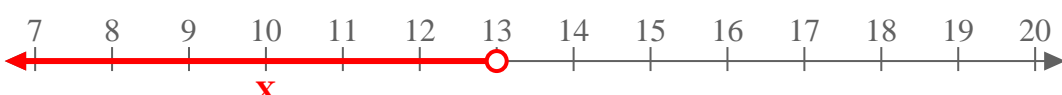
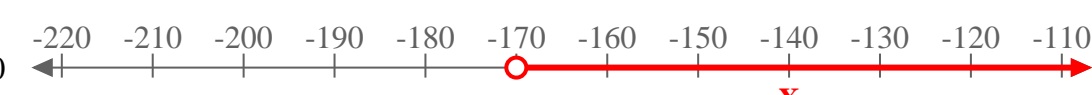
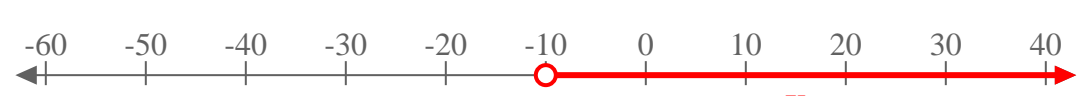
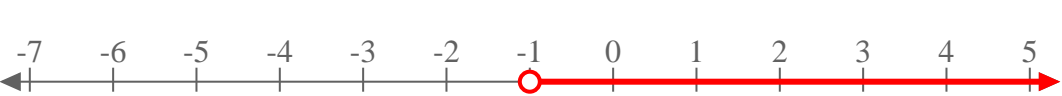









Use the numberline to express the inequality.

- Ex)** $X \leq 11$ 
- 1) $X > 15$ 
- 2) $X < 13$ 
- 3) $X > -170$ 
- 4) $X > -10$ 
- 5) $X > -1$ 
- 6) $X > -40$ 
- 7) $X < -18$ 
- 8) $X \geq 95$ 
- 9) $X > 195$ 
- 10) $X < 17$ 
- 11) $X < -15$ 
- 12) $X \leq -120$ 
- 13) $X \leq 120$ 



Use the numberline to express the inequality.

- Ex) $X \leq 11$ 
- 1) $X > 15$ 
- 2) $X < 13$ 
- 3) $X > -170$ 
- 4) $X > -10$ 
- 5) $X > -1$ 
- 6) $X > -40$ 
- 7) $X < -18$ 
- 8) $X \geq 95$ 
- 9) $X > 195$ 
- 10) $X < 17$ 
- 11) $X < -15$ 
- 12) $X \leq -120$ 
- 13) $X \leq 120$ 